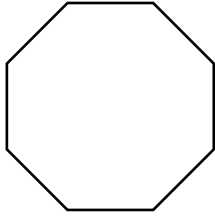


Name _____

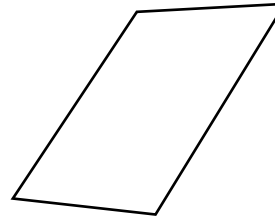
Polygons

Classify each polygon. Then tell if it appears to be a regular or irregular polygon.

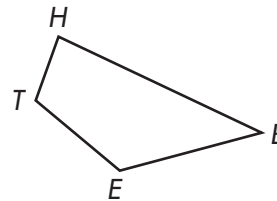
1.



2.



3. Classify the polygon. Name the vertices.



4. Which polygon has eight sides?

A quadrilateral

B pentagon

C hexagon

D octagon

5. **Writing to Explain** Draw two regular polygons and two that are irregular. Use geometric terms to describe one characteristic of each type.

